


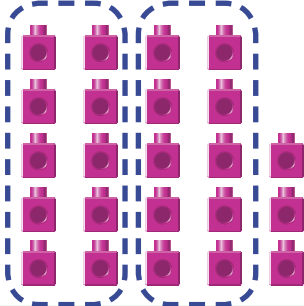
Count 23 cubes.



How many groups of 10 are there? How many are left over?

You can make groups of 10.

There are 2 groups of 10.



Count how many ones are left over.

There are 3 left over.

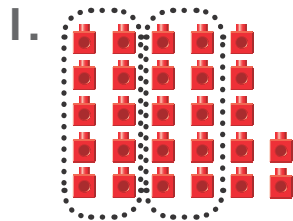


23 is 2 groups of 10 and 3 ones.


So, 23 is 2 groups of 10 and 3 left over.

Convince Me! Why does 37 have 3 groups of 10 and not 4 groups of 10?

Guided Practice Circle groups of 10. Write the numbers.




2 groups of 10
and 7 ones is 27.



_____ groups of 10
and _____ ones is _____.


Independent Practice ☆ Circle the groups of 10. Write the numbers.




_____ groups of 10 and _____ ones
is _____.



_____ groups of 10 and _____ ones
is _____.




_____ group of 10 and _____ ones
is _____.



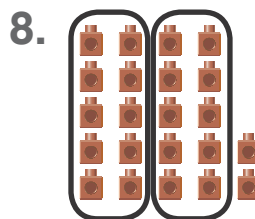
_____ groups of 10 and _____ ones
is _____.



Write the number of groups of 10 and the number of ones. Then write the total.



_____ groups of 10 and _____ ones
is _____.



_____ groups of 10 and _____ ones
is _____.

Problem Solving

Draw a picture and write the numbers to solve each problem below.

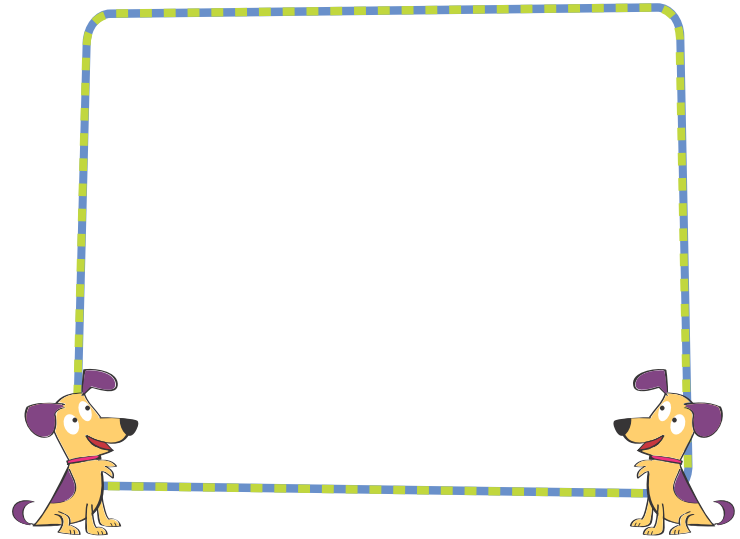
9. **Model** A monkey has 32 bananas.
10 bananas are in each bunch.



How many bunches are there? _____

How many bananas are left over? _____

10. **Model** The dogs have 21 bones.
10 bones are in each bowl.



How many bowls are there? _____

How many bones are left over? _____

11. Higher Order Thinking

Amil writes a number.

His number has 5 groups of 10.

His number has less than 9 ones.

What number could Amil have written?

12. **Assessment Practice** A store has 5 bunches of grapes and 3 left over. Each bunch has 10 grapes. How many grapes are there in all? Explain.
